



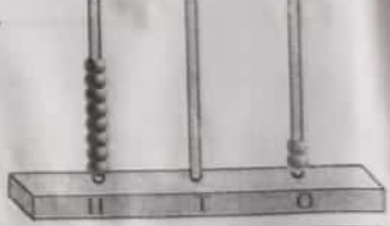
1. Write the missing numbers :-


671							
		684					
						700	
			705				
					718		


2. Write the number shown on each abacus. The first one has been done for you.


1. 
 1 2 4

2. 

3. 

4. 

5. 

6. 

3. Write in hundreds, tens and ones.

280	<input type="text"/>	hundreds	<input type="text"/>	tens	<input type="text"/>	ones
399	<input type="text"/>	hundreds	<input type="text"/>	tens	<input type="text"/>	ones
500	<input type="text"/>	hundreds	<input type="text"/>	tens	<input type="text"/>	ones
608	<input type="text"/>	hundreds	<input type="text"/>	tens	<input type="text"/>	ones

4. What comes just before :-

<input type="text"/>	341	<input type="text"/>	517
<input type="text"/>	285	<input type="text"/>	400

5. What comes just after :-

630	<input type="text"/>	479	<input type="text"/>
209	<input type="text"/>	799	<input type="text"/>